




The unicorn is \_\_\_\_\_ squares long.



The princess is \_\_\_\_\_ squares tall.



The wand is \_\_\_\_\_ squares long.